

A 1. 25, 35, 45, 55, , 75

2. ✗ the square.



3. What time is one hour after 12 o'clock?

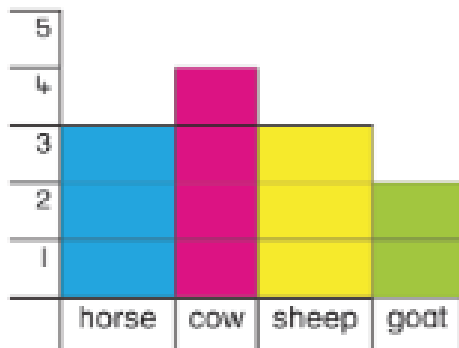
4. How much? c



5.
$$\begin{array}{r} 26 \\ + 16 \\ \hline \end{array}$$




6. How many animals altogether?



7. $3 + 4 = 4 + \text{$

8. How much was eaten?

$\frac{1}{2}$ less than $\frac{1}{2}$



<input type="text"/>
8

B 1.

June						
S	M	T	W	T	F	S
	1	2	3	4	5	6
7	8	9	10	11	12	13
14	15	16	17	18	19	20
21	22	23	24	25	26	27
28	29	30				


How many Mondays?

2. $8 + 3 + 2 = \text{$

3. Tick the number shown on the abacus.

T	U	22	<input type="checkbox"/>
		42	<input type="checkbox"/>
		24	<input type="checkbox"/>

4. Finish the pattern.

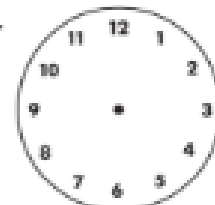


5.
$$\begin{array}{r} 64 \\ + 23 \\ \hline \end{array}$$



6. $7 - \text{$ = 5

7. Show 2 o'clock.



8. $12 + \text{$ = 15

<input type="text"/>
8